



**INFINITY**

# (STATISTICS AND DATA INTERPRETATION)

11:00 am



Canva

By:-chandrashekhar





**FEB+JUNE+DEC**

**NET की तैयारी अब**

**₹ 1699** ~~₹ 6800~~

**75% OFF**

[www.fillerform.info](http://www.fillerform.info)



**75% OFF- JOIN NOW**

**NET/MP-SET/Raj-SET  
FULL PAPER 1ST**

**₹1699**

~~₹6800~~

**6 MONTHS- COURES**

**WWW.FILLERFORM.INFO**




- +91 81453 66384 joined using this group's invite link
- +91 70102 37343 joined using this group's invite link
- +91 96672 47765 joined using this group's invite link
- +91 98557 99207 joined using this group's invite link
- +91 60035 13791 joined using this group's invite link
- +91 83590 38670 joined using this group's invite link
- +91 91497 27505 joined using this group's invite link
- +91 70910 66218 joined using this group's invite link
- +91 75779 16791 joined using this group's invite link
- +91 60035 13791 left
- +91 90012 26665 joined using this group's invite link
- +91 80037 25657 joined using this group's invite link
- +91 89555 46730 joined using this group's invite link


December 28

Channel created

Channel photo changed



University Grants Commi



**1,711** Posts   **6,845** Followers   **7** Followi

**Govt job 2020 (Fillerform) 17K**  
 Education Website  
 Free Online Computer Class   
 1. Baisc computer   
 2. Web development   
 3. Hackig ... more  
[youtu.be/mIfPC5C-EvQ](https://youtu.be/mIfPC5C-EvQ)  
 Jaipur, Rajasthan

Edit Profile

Promotions   Insights   Contact

New   15K Sub   YouTube   2000 users





**NET Dec 2022**

**Exam -21 Feb**

**NET June 2023**

**Exam - 13 June**

[www.fillerform.info](http://www.fillerform.info)



**Fillerform**



**MP SET 2023**

**Raj SET 2023**

**All SET Exam 2023**



# UGC NET 2023

## Online Quiz

12:00 PM

 Fillerform





# UGC NET-2022-23 MISSION JRF!

 <p>JANUARY 02</p>	<b>GK</b> Yogendra	<b>08</b> AM	
 <p>JANUARY 02</p>	<b>PYQ/MCQ</b> Nidhu	<b>09</b> AM	
 <p>JANUARY 02</p>	<b>UNIT-1</b> USHA	<b>10</b> AM	
 <p>JANUARY 02</p>	<b>Reasoning</b> Chandrashekhar	<b>11</b> AM	
 <p>JANUARY 02</p>	<b>ICT</b> Jitendra	<b>09</b> PM	

**FOR PAPER -1**



Youtube



8233651148/ Filler Form.info





राष्ट्रीय परीक्षा एजेंसी  
National Testing Agency  
Excellence in Assessment

# UGC-NET 2022

29 Jan – 17 Jan  
Application Form

21 Feb – 11 March  
Exam Date

10 Feb  
Admit Card

08 April  
Results Out

[www.ugc-net.com](http://www.ugc-net.com)

**Fillerform**

 fillerform

 8209837844



Let's Start




		TOPIC NAME
1	Monday, 2 January, 2023	<b>fraction+C7:C36</b>
2	Tuesday, 3 January, 2023	<b>Percentage</b>
3	Wednesday, 4 January, 2023	<b>Profit loss</b>
4	Thursday, 5 January, 2023	<b>Discount</b>
5	Friday, 6 January, 2023	<b>Simple interest</b>
6	Saturday, 7 January, 2023	
7	Sunday, 8 January, 2023	<b>Compound interest</b>
8	Monday, 9 January, 2023	<b>Partnership</b>
9	Tuesday, 10 January, 2023	<b>average</b>
10	Wednesday, 11 January, 2023	<b>ratio</b>
11	Thursday, 12 January, 2023	<b>Time and work</b>
12	Friday, 13 January, 2023	<b>Pipes and Cisterns</b>



*Ugc-net*  
*mathematics*  
**(Data Interpretation (DI))**

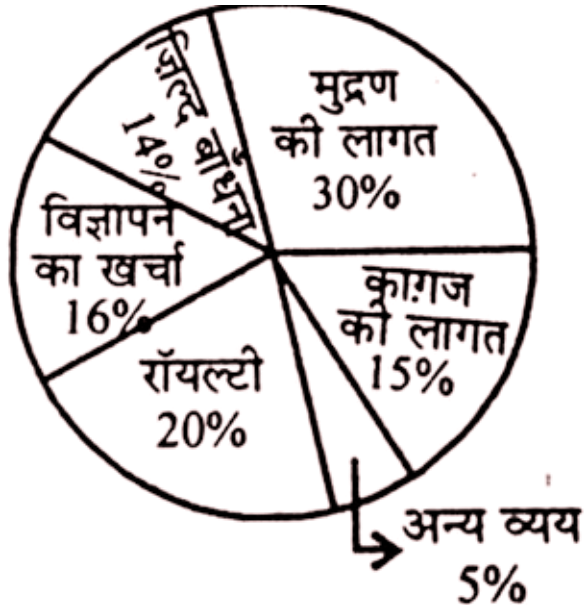
निर्देश Direction:: नीचे दिया गया वृत्तरेख किसी प्रकाशक द्वारा एक पुस्तक निकालने में किया गया व्यय दर्शाता है। वृत्तरेख का अध्ययन कीजिए प्रश्न सं. 1-5 के उत्तर दीजिए।

The pie chart given below shows the cost incurred by a publisher in bringing out a book. Study the circle diagram Question no. Answer 1-5.



1. यदि मुद्रण की लागत रु.19,500 है, तो रॉयल्टी है If the cost of printing is Rs.19,500, then the royalty is (A) रु.9,100 (B) रु.10,000 © रु.10,400 (D) रु.13,000

D

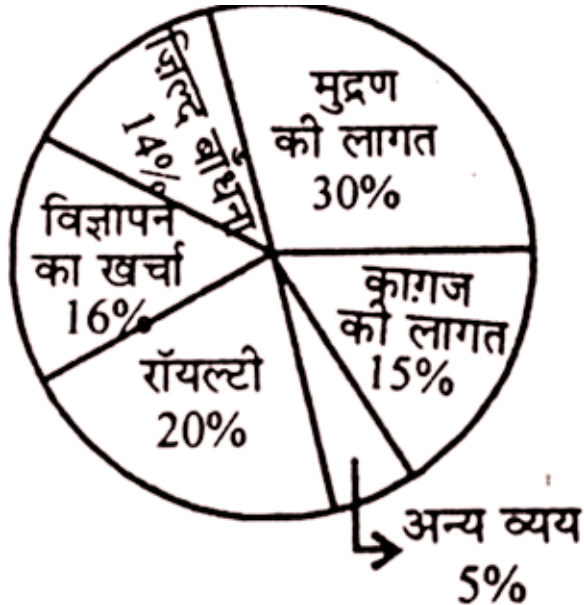




Q2 कागज की लागत के लिए त्रिज्य-खंड का केंद्रीय कोण है? What is the central angle of the radius-section for the cost of the paper?

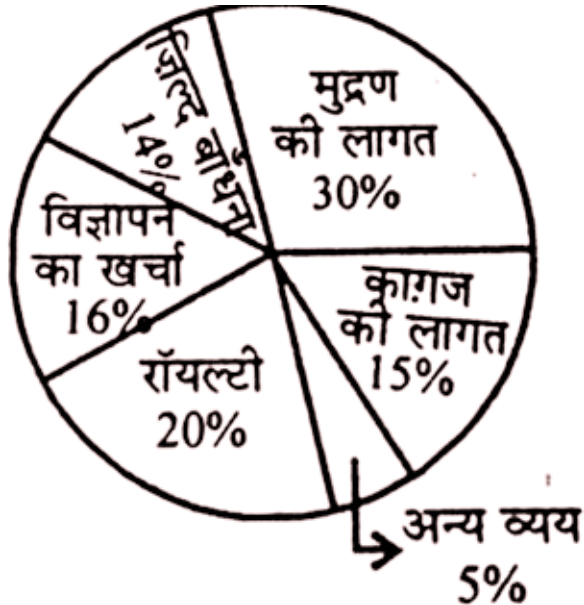
- (A)  $50.4^\circ$  (B)  $54^\circ$  (C)  $57.6^\circ$  (D)  $72^\circ$

**B**



Q3 यदि कागज की लागत रु.5,000 है, तो विज्ञापन का खर्चा तथा राँयल्टी निकाल कर कुल लागत है? If the cost of the paper is Rs.5,000, then the total cost after deducting the advertising expenses and royalties is? (A) रु.12,000 (B) रु.16,667 © रु. 24,666(2/3) (D) रु.36,000

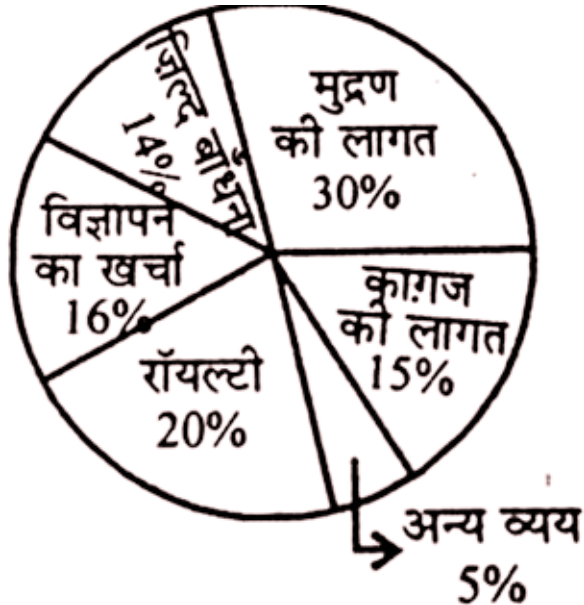
a



Q4 यदि 3000 प्रतियाँ प्रकाशित की गई, अन्य व्यय रु.12,000 के थे और प्रकाशक का लाभ 25% है, तो प्रत्येक प्रति का अंकित मूल्य है? If 3000 copies were published, other expenses were Rs.12,000 and the profit of the publisher is 25%, then the marked price of each copy is?

- (A) रु.80 (B) रु. 95 © रु.100 (D) रु.125

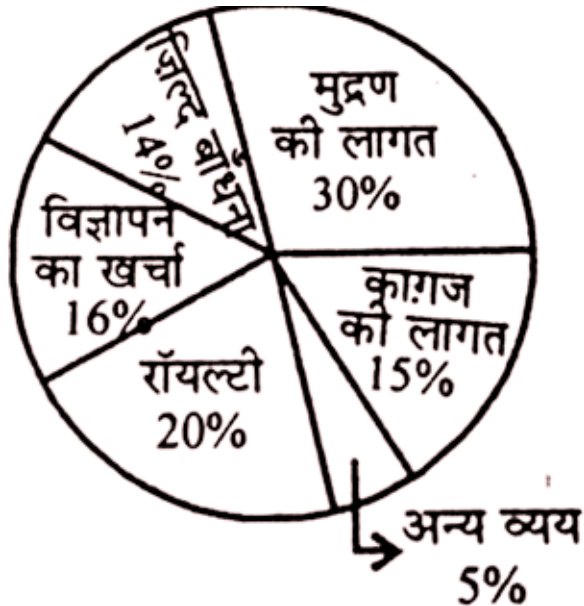
a



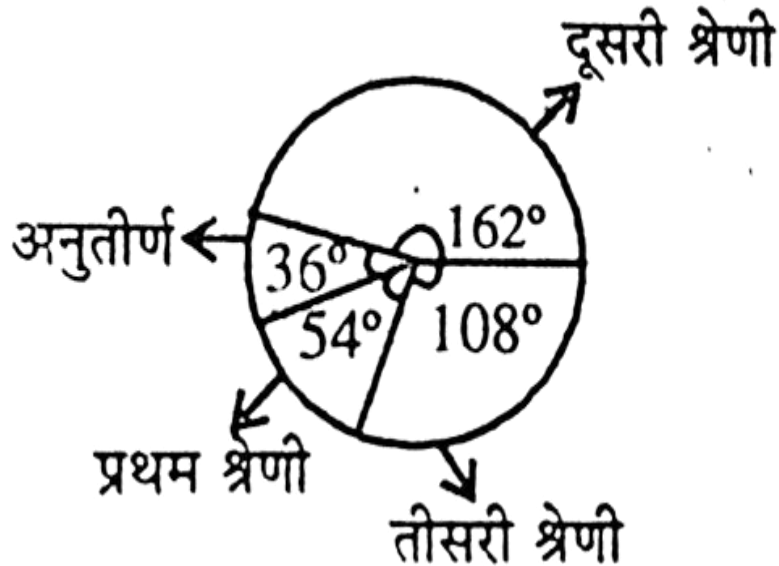


Q5 विज्ञापन का खर्चा रॉयल्टी से कितना कम है? How much is advertising cost less than royalties? (A) 10% (B) 15% © 20% (D) 25%

C



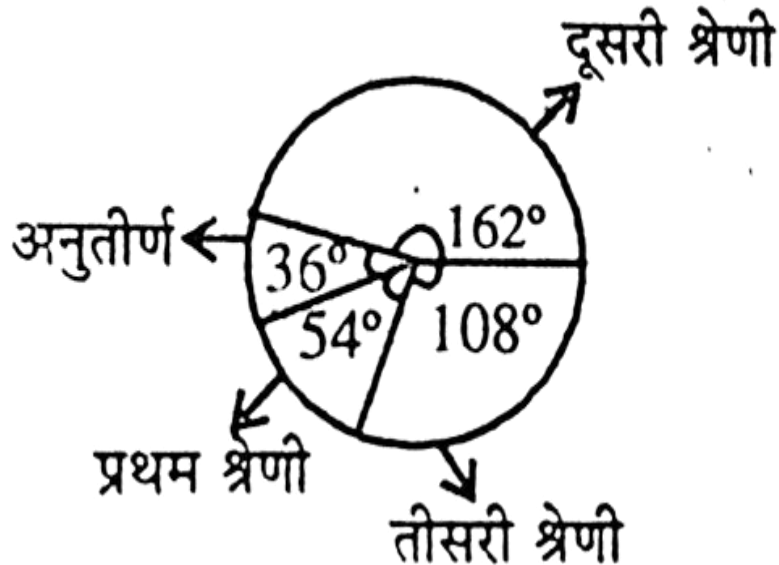
निर्देश: निम्नलिखित वृत्तरेखा में किसी एक वर्ष में 360 छात्रों की परीक्षा में उपलब्धि दिखाई गई है। वृत्तरेखा का अध्ययन करें और प्रश्न सं. 6-10 के उत्तर दें। The following histogram shows the performance of 360 students in an examination in a year. Study the pie chart and answer question no.



Q6. दूसरी श्रेणी में उत्तीर्ण छात्रों की संख्या प्रथम श्रेणी में उत्तीर्ण छात्रों की संख्या से कितनी अधिक है? The number of students passed in second division is how much more than the number of students passed in first division?

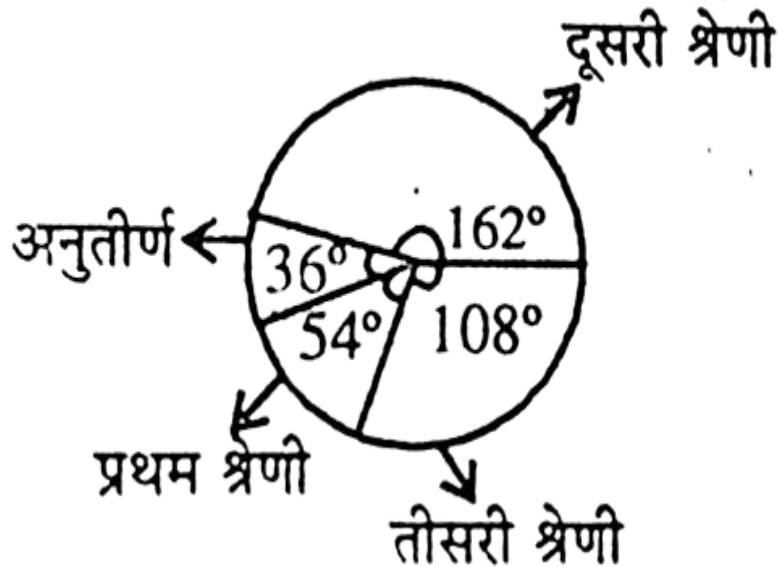
- (A) 109 (B) 108 (C) 111 (D) 112

**B**



C

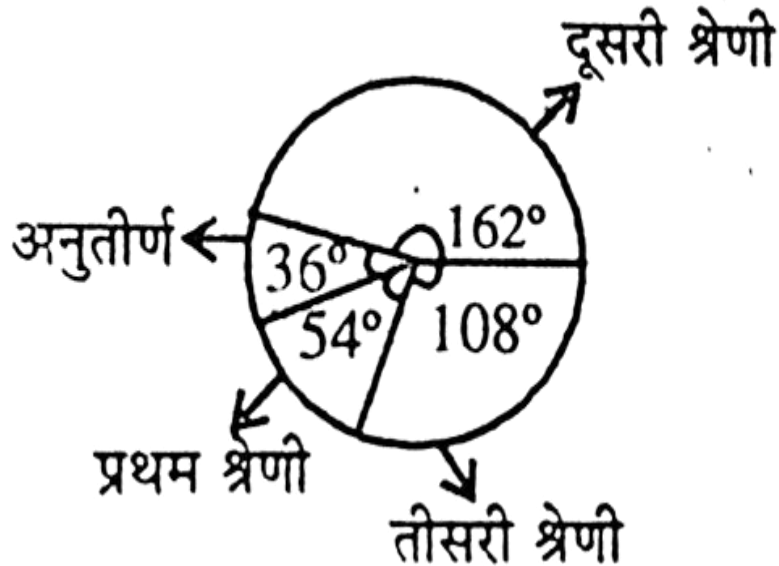
Q7. उत्तीर्ण छात्रों का अनुत्तीर्ण छात्रों के साथ अनुपात है The ratio of passed students to failed students is (A) 1:9 (B) 2:7 (C) 9:1 (D) 5:1





Q8.परीक्षा में अनुत्तीर्ण होने वाले छात्रों का प्रतिशत है? What is the percentage of students who failed in the exam? (A) 10% (B) 30% © 20% (D) 36%

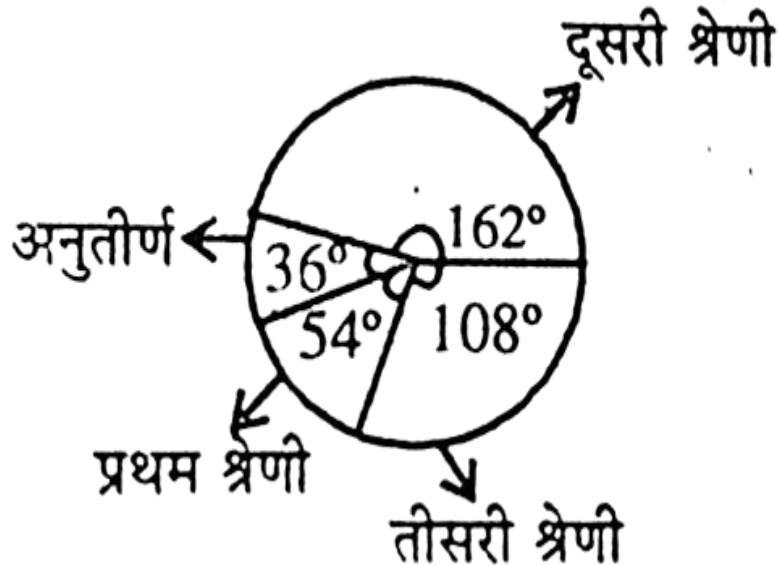
a



Q9.दूसरी या तीसरी श्रेणी में उत्तीर्ण होने वाले छात्रों की कुल संख्या है? What is the total number of students who passed in second or third division?

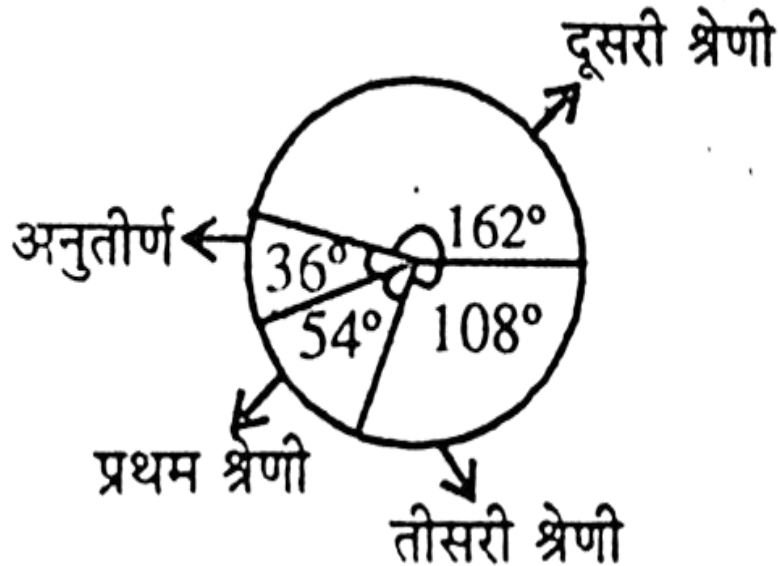
- (A) 270 (B) 108 © 162 (D) None

a



D

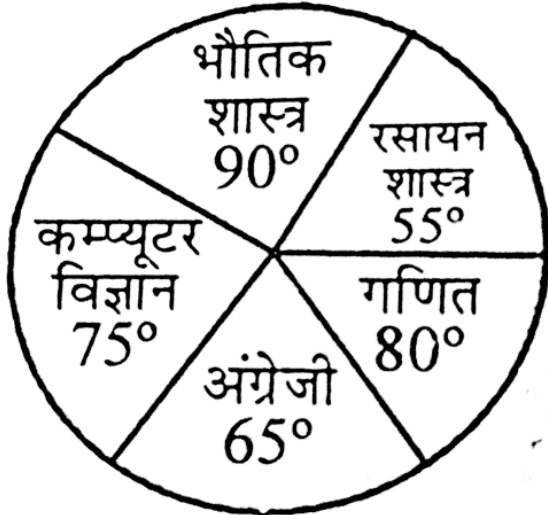
Q10. प्रथम श्रेणी में उत्तीर्ण छात्रों की संख्या है? The number of students passed in first division is? (A) 64 (B) 74 (C) 45 (D) 54





निर्देश- नीचे दिये गए पाई-चार्ट में किसी छात्र द्वारा एक परीक्षा में पाँच विषयों के प्राप्तांक दिए गए हैं, उसके प्राप्तांकों का योग 450 है, पाई चार्ट के आधार पर प्रश्न 11-12 का उत्तर दीजिए-

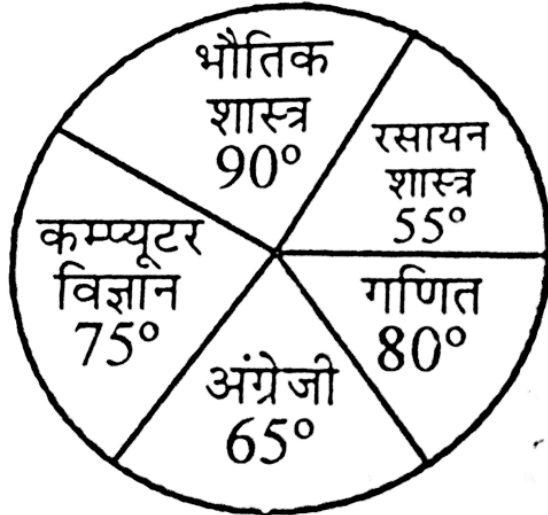
Direction- The pie-chart given below shows the marks scored by a student in five subjects in an examination, the sum of his marks is 450, answer questions 11-12 on the basis of the pie-chart-



11. छात्र ने कुल अंकों का कितने प्रतिशत भौतिक शास्त्र में प्राप्त किया? What percentage of the total marks did the student obtain in Physics?

- (A) 20% (B) 30% (C) 35% (D) 25%

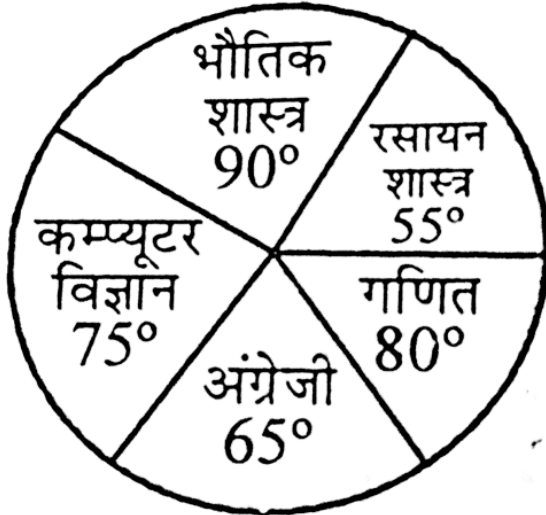
D



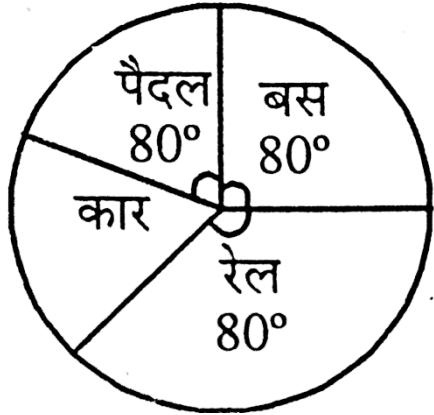
12. पाँच विषयों के औसत प्राप्तांक है-? The average score of five subjects is-?

- (A) 82 (B) 90 © 95 (D) 76

**B**



एक विद्यालय में, कुल छात्रों की संख्या 2,160 है। उक्त पाई-चार्ट में उन छात्रों द्वारा प्रयुक्त विभिन्न वाहनों को दर्शाया गया है। इस चार्ट के आधार पर प्रश्नों (13-17) के उत्तर दीजिए। In a school, the total number of students is 2,160. The above pie-chart shows the various vehicles used by those students. Answer the questions (13-17) on the basis of this chart.

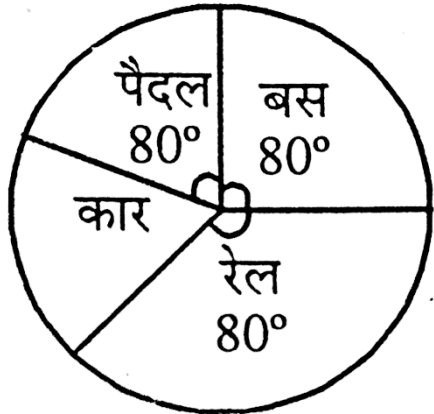




Q13. कार द्वारा विद्यालय आने वाले छात्रों की कुल संख्या कितनी है? What is the total number of students who come to school by car?

- (A) 420 (B) 290 (C) 720 (D) 480

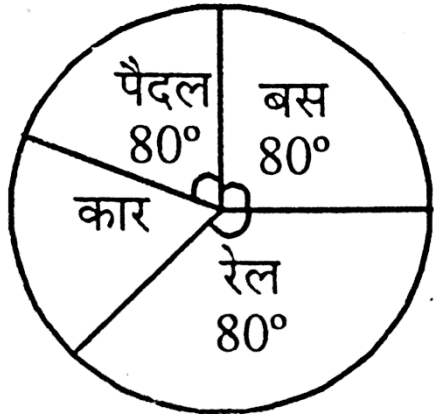
C



Q14. कार द्वारा विद्यालय आने वाले छात्रों और बस द्वारा विद्यालय आने वाले छात्रों का अनुपात कितना है? What is the ratio of students who come to school by car to that of students who come to school by bus?

- (A) 21:24 (B) 3:2 © 36:27 (D) 36:21

**B**

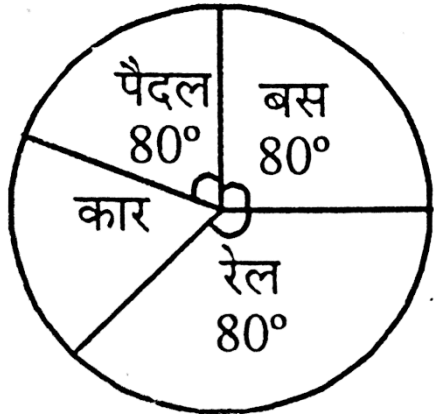


Q15. पैदल चलकर या बस द्वारा विद्यालय आने वाले छात्रों की कुल संख्या कितनी है?

What is the total number of students who come to school on foot or by bus?

- (A) 480 (B) 540 © 960 (D) 170

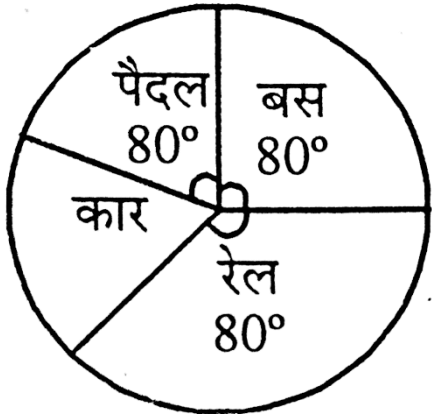
C



16. उन छात्रों की संख्या कितनी है, जो रेलगाड़ी द्वारा विद्यालय नहीं आते हैं? What is the number of students who do not come to school by train?

- (A) 720 (B) 1020 (C) 2040 (D) 1680

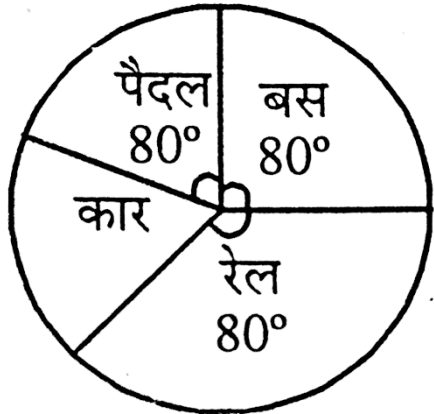
D



17. बस द्वारा विद्यालय आने वाले छात्रों की संख्या, पैदल चलकर विद्यालय आने वाले छात्रों की संख्या से कितनी अधिक है? The number of students who come to school by bus is how much more than the number of students who come to school by foot?

- (A) 10% (B) 0% (C) 11% (D) 11.5%

**D**







# 2 JAN 2023

All SET Exam Free Class



## Filler Form ✓

@FillerForm

218K subscribers

Subscribe

HOME

VIDEOS

SHORTS

LIVE

PLAYLISTS

COMMUNITY

CHANNELS

ABOUT



All playlists ▾

Created playlists



UGC NET 2023-ICT

Updated yesterday

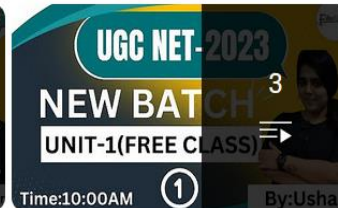
[View full playlist](#)



UGC NET 2023- Unit 5

Updated today

[View full playlist](#)



UGC NET 2023 - Unit 1

Updated today

[View full playlist](#)



UGC NET MCQ by Nidhu

Updated today

[View full playlist](#)



UGC NET 2023

Updated today

[View full playlist](#)

 8233651148

[www.ugc-net.com](http://www.ugc-net.com)

## How to Paid Class

 8233651148

[www.Fillerform.info](http://www.Fillerform.info)



  
**FILLERFORM**  
Education Hub

# UGC NET FULL COURSE

**Best Services for You**

-  Live Class
-  Notes PDF
-  100-Mock Test
-  PYQ Paper
-  Class doubt
-  24\*7 Support

**90% OFF**

**₹ 499**

 8233651148

 [www.fillerform.info](http://www.fillerform.info)

8233651148

How to Join Free Class

8233651148

www.Fillerform.info

The screenshot shows the YouTube channel page for 'Filler Form', which has 155K subscribers. The channel is focused on UGC NET preparation. At the top, there are banners for a 'Free App' (listing MCQ, PYQ, Class, Notes, and Test) and a 'UGC NET Free Class' for 'Paper 1st & 2nd paper'. A 'SUBSCRIBE' button is highlighted with a blue box. Below the navigation tabs (HOME, VIDEOS, PLAYLISTS, COMMUNITY, CHANNELS), the 'Uploads' section is visible. It features three video thumbnails: 'Current Affairs(21-March)' premiering at 09:00 AM, 'JRF का Amount कैसे मिलता है' (How to get jrf scholarship) with 245 views, and 'UGC NET 2022 History दिल्ली सल्तनत' (NET History by Pawan Sir) premiering on 21/03/2022 at 13:00. A 'SET REMINDER' button is present for the history video.





# Congratulations



## UGC NET 2021 Student Qualified



ASHOK



BIRENDRA



PAWAN



MANISHA



ABHUET



NUDASIR AMIN



DEV



TRINATHA



MANIKA



RAGHUVEER



VAISHALI



RASHMI



RANA ROY



MANAS



KHUSHBU



PUSHAR



SHISHUPA



CHANDER



K M RENU



VIKAS



SHASHI



TULSI



POOJA



RAM KISON



SALONI



KANCHAN



Renu



UMME IRAM



SHIVANGI



SADANAND



VIKASH



BHAGYASHW



VISHU



RAJAT




JIVAN



RAJAT sharma



NISHTHA



RASHMI



ANKITA



MANOJ



SVDIP



RAVI



Jyoti



ARNAD



KAJLASH



KAJLASH



SALMA TUDU




DASTGEER



VISHAL




km neeshu devi



nikita raj



mudasir



jani vandana



piyush



arvind



bijoy pal



gouranga



pradeep



vinod



amit kumar



alok



Kalyan



sarojini



ravi



kamleesh Rani



juhi singh



amit kumar



anil kumar



asha



surekha



sakshi



PAWAN



shazaiz



ritu



kavita



जिसने भी खुद को खर्च  
किया है,  
DUNIYA ने उसी को  
GOOGLE पर SEARCH  
किया है।



2



[www.fillerform.com](http://www.fillerform.com)



fillerform